



Eagles Consultancy Ltd

Functional Skills Initial Assessment

Maths Entry Level

Name:

Organisation:

**Please ensure throughout this test you show
your working out for each question where
necessary.**

	EL3	OVERALL
Total:		
%		

Money

1)

Add up this bill.
Write your answer
in the box.

£

Chicken Balti - £5.60
Mushroom Pasta Bake - £3.73
Ham Toastie - £1.45
Chips - £0.80

Working Out

2)

Fill out the missing
value on the
shopping list for rice
noodles.

You pay your
shopping using a
£20 note, what is
the change?

Write your answer
in the box below.

£

F/range eggs	£1.75
Bacon	£2.99
Butter	£0.75
Rice noodles	
Carrots	£0.35
Chilli powder	£0.76
Bread	£0.45
Rice	£1.50
Washing powder	£1.76

Total: £11.20

Please show your working out below

Show to check your answer.

Number

3)

Tick the even numbers.

34

41

63

77

15

☐

4)

$$16 \times \boxed{} = 32$$

☐

5)

$$\begin{array}{r} 64 \\ \times 3 \\ \hline \boxed{} \\ \hline \hline \end{array}$$

☐

6)

$$48 \div 4 = \boxed{}$$

☐

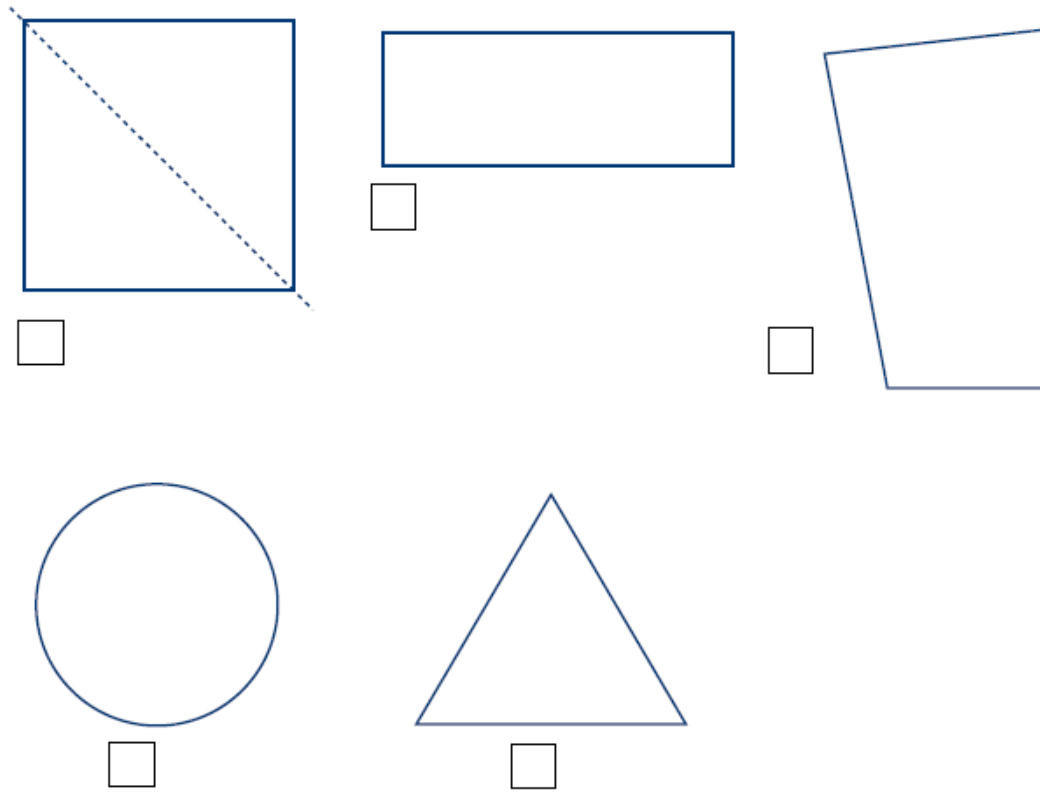
7)

$$90 \div \boxed{} = 30$$

☐


Shape

- 8) Tick the shape that **cannot** be divided into 2 equal parts, with both parts the same shape.



Measures

- 9) What is this weight in kilograms? Write your answer in the box.



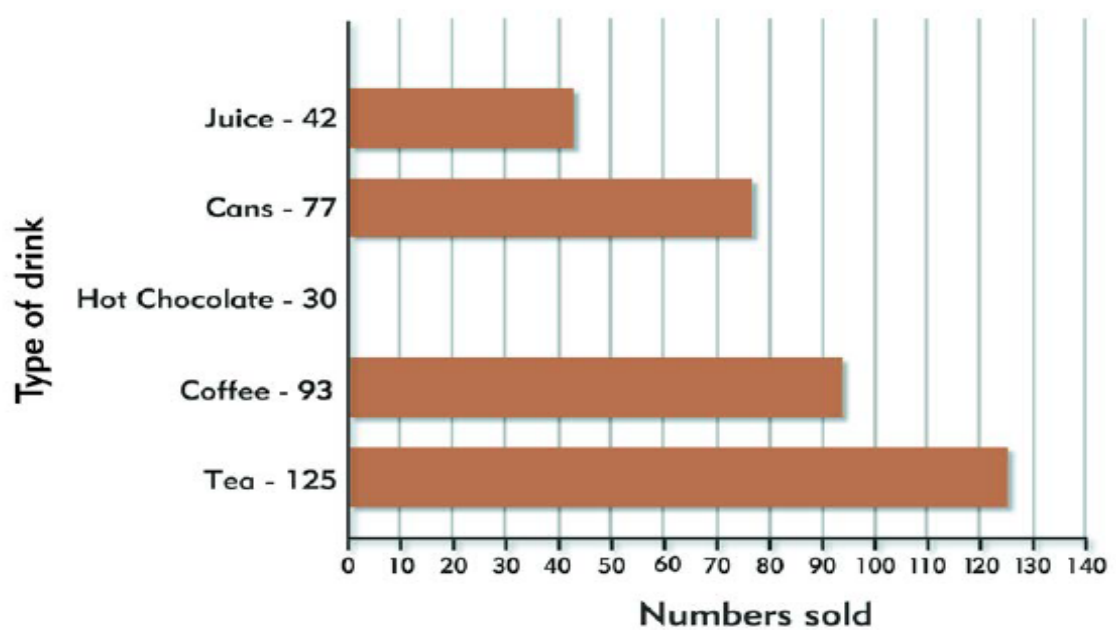
10)

You need 125ml of water to mix a feed for a baby. Mark 125ml on the bottle.



11)

Tick on the graph to show how many hot chocolate drinks were sold.

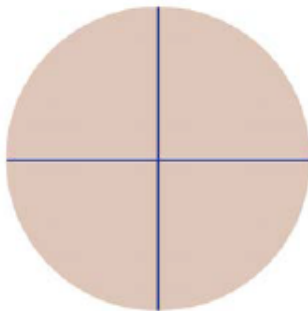


Fractions/Decimals/Percentages


- 12) Three out of the four people have a mobile phone. Write this as a fraction.



- 13) What fraction is left if three pieces are taken away?



- 14) What fraction is shaded?



Sorting and Ordering

15) Complete the table.

Using numbers 1-20, sort and organise the numbers into the correct column

	Odd Numbers	Even Numbers
Numbers Lower Than 10		
Numbers 10 and higher		